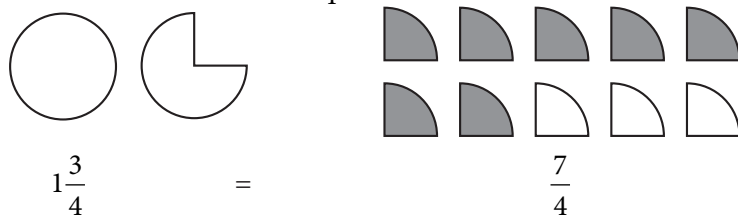
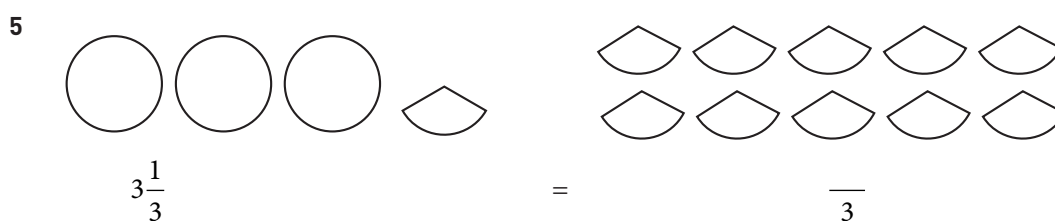
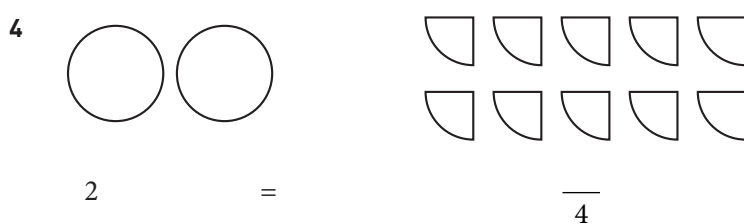
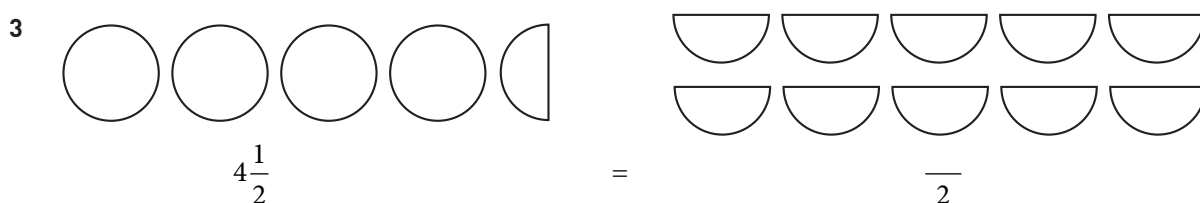
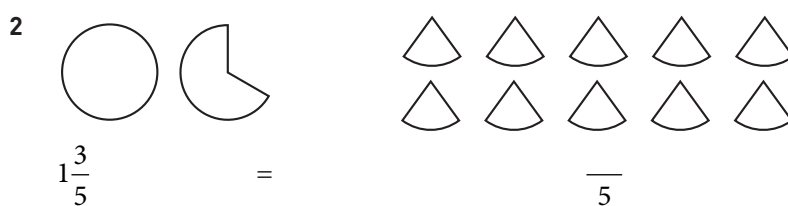
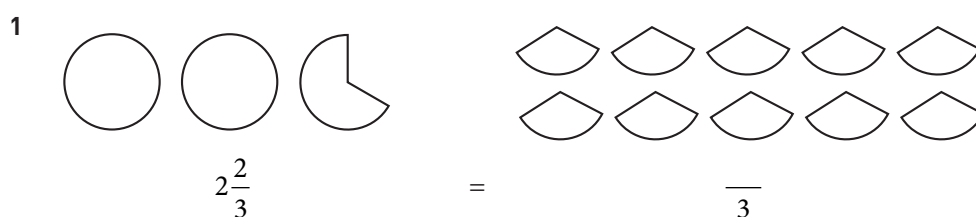


Blandad form och bråkform

Hur många fjärdedelar är $1\frac{3}{4}$? Skugga rätt antal delar.



Skugga rätt antal delar i uppgifterna nedan.



Blandad form och bråkform**FACIT**

1 $2\frac{2}{3} = \frac{8}{3}$

2 $1\frac{3}{5} = \frac{8}{5}$

3 $4\frac{1}{2} = \frac{9}{2}$

4 $2 = \frac{8}{4}$

5 $3\frac{1}{3} = \frac{10}{3}$