

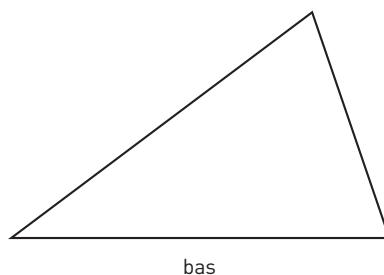
Arean av trianglar 1

Dra höjderna i trianglarna. Mät bas och höjd i hela och halva centimeter. Beräkna arean.

1 Basen = _____

Höjden = _____

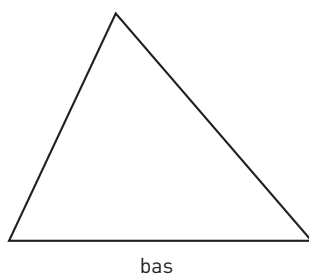
Arean = _____



2 Basen = _____

Höjden = _____

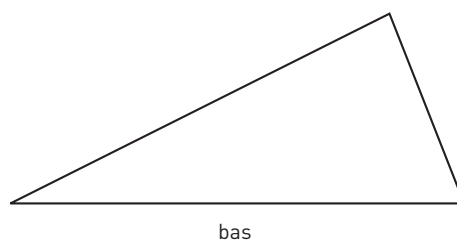
Arean = _____



3 Basen = _____

Höjden = _____

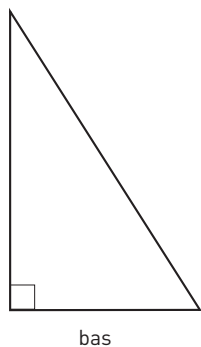
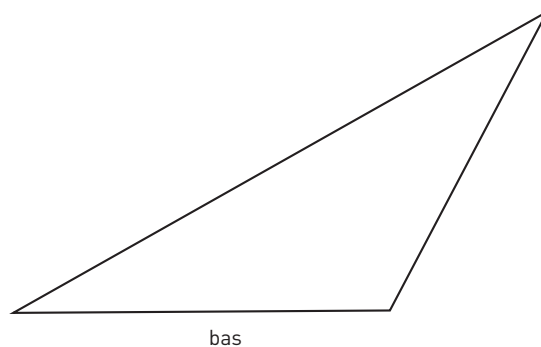
Arean = _____



4 Basen = _____

Höjden = _____

Arean = _____



5 Basen = _____

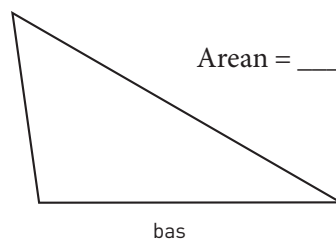
Höjden = _____

Arean = _____

6 Basen = _____

Höjden = _____

Arean = _____



Arean av trianglar 1

FACIT

1 $7,5 \text{ cm}^2$

2 6 cm^2

3 $7,5 \text{ cm}^2$

4 10 cm^2

5 5 cm^2

6 5 cm^2