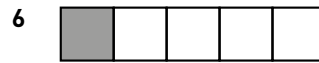


Hur stor andel ? 1


Hur stor andel är skuggad? Svara i bråkform och decimalform.




— = —



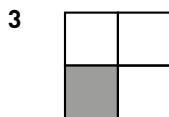
— = —



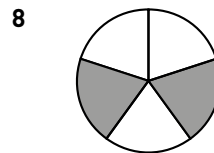
— = —



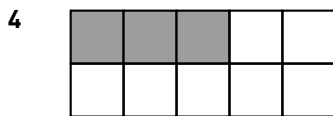
— = —



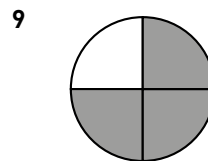
— = —



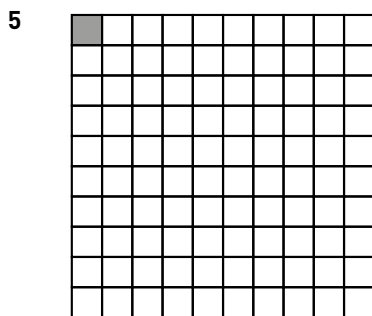
— = —



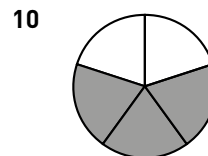
— = —



— = —



— = —



— = —

Hur stor andel? 1**FACIT**

1 $\frac{1}{2} = 0,5$

2 $\frac{1}{10} = 0,1$

3 $\frac{1}{4} = 0,25$

4 $\frac{3}{10} = 0,3$

5 $\frac{1}{100} = 0,01$

6 $\frac{1}{5} = 0,2$

7 $\frac{29}{100} = 0,29$

8 $\frac{2}{5} = 0,4$

9 $\frac{3}{4} = 0,75$

10 $\frac{3}{5} = 0,6$