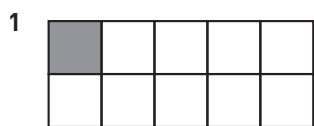
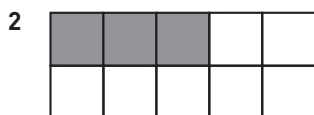


Hur stor andel? 2


Hur stor andel är skuggad? Svara i bråkform, decimalform och procentform.




— = — = —



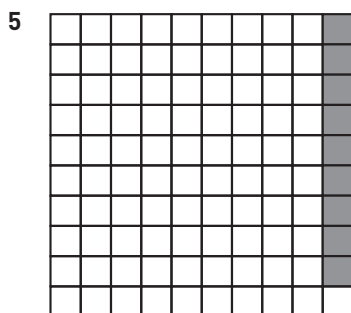
— = — = —



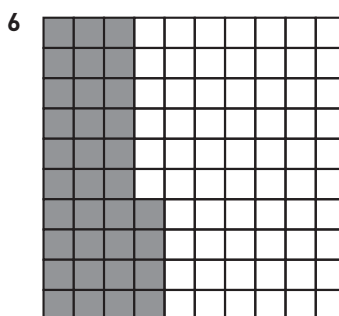
— = — = —



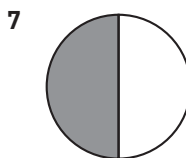
— = — = —



— = — = —



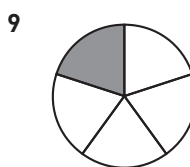
— = — = —



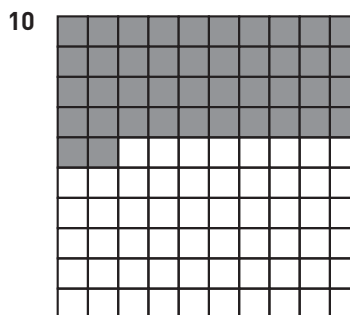
— = — = —



— = — = —



— = — = —



— = — = —

Hur stor andel? 2

FACIT

$$1 \quad \frac{1}{10} = 0,1 = 10 \%$$

$$2 \quad \frac{3}{10} = 0,3 = 30 \%$$

$$3 \quad \frac{7}{10} = 0,7 = 70 \%$$

$$4 \quad \frac{1}{100} = 0,01 = 1 \%$$

$$5 \quad \frac{9}{100} = 0,09 = 9 \%$$

$$6 \quad \frac{34}{100} = 0,34 = 34 \%$$

$$7 \quad \frac{1}{2} = 0,5 = 50 \%$$

$$8 \quad \frac{1}{4} = 0,25 = 25 \%$$

$$9 \quad \frac{1}{5} = 0,2 = 20 \%$$

$$10 \quad \frac{42}{100} = 0,42 = 42 \%$$