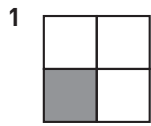


**Hur stor andel? (I)**

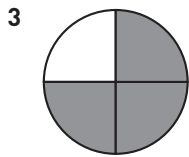
Hur stor andel är skuggad? Svara i bråkform och decimalform.



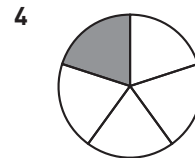
\_\_\_\_\_ = \_\_\_\_\_



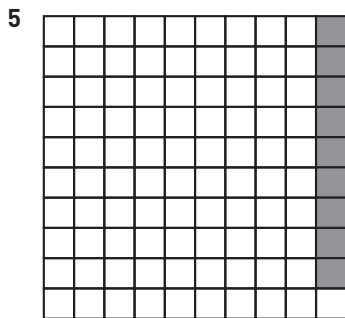
\_\_\_\_\_ = \_\_\_\_\_



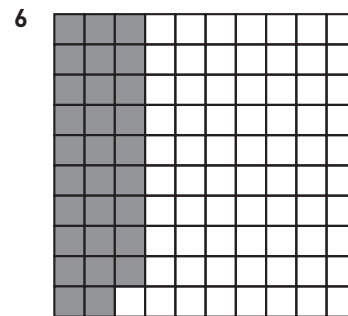
\_\_\_\_\_ = \_\_\_\_\_



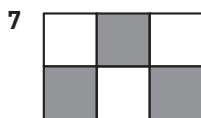
\_\_\_\_\_ = \_\_\_\_\_



\_\_\_\_\_ = \_\_\_\_\_



\_\_\_\_\_ = \_\_\_\_\_



\_\_\_\_\_ = \_\_\_\_\_



\_\_\_\_\_ = \_\_\_\_\_



\_\_\_\_\_ = \_\_\_\_\_



\_\_\_\_\_ = \_\_\_\_\_

**Hur stor andel? (I)****FACIT**

1  $\frac{1}{4} = 0,25$

2  $\frac{3}{10} = 0,3$

3  $\frac{3}{4} = 0,75$

4  $\frac{1}{5} = 0,2$

5  $\frac{9}{100} = 0,09$

6  $\frac{29}{100} = 0,29$

7  $\frac{1}{2} = 0,5$

8  $\frac{4}{5} = 0,8$

9  $\frac{2}{5} = 0,4$

10  $\frac{7}{10} = 0,7$