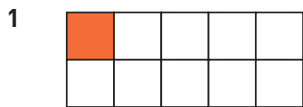
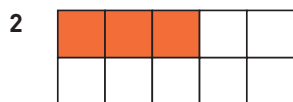


Hur stor andel? (II)

Hur stor andel är röd? Svara i bråkform, decimalform och procentform.




— = — = — %




— = — = — %



— = — = — %



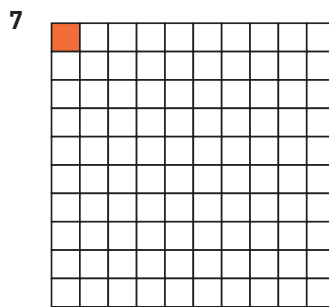
— = — = — %



— = — = — %



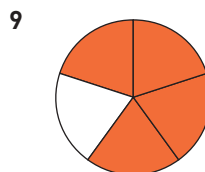
— = — = — %



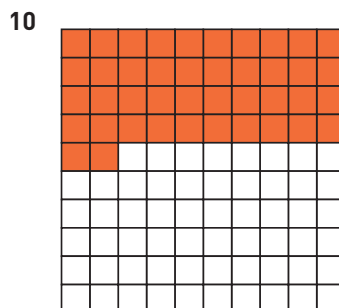
— = — = — %



— = — = — %



— = — = — %



— = — = — %

Hur stor andel? (II)**FACIT**

1 $\frac{1}{10} = 0,1 = 10 \%$

2 $\frac{3}{10} = 0,3 = 30 \%$

3 $\frac{7}{10} = 0,7 = 70 \%$

4 $\frac{9}{10} = 0,9 = 90 \%$

5 $\frac{23}{100} = 0,23 = 23 \%$

6 $\frac{2}{5} = 0,4 = 40 \%$

7 $\frac{1}{100} = 0,01 = 1 \%$

8 $\frac{1}{5} = 0,2 = 20 \%$

9 $\frac{4}{5} = 0,8 = 80 \%$

10 $\frac{42}{100} = 0,42 = 42 \%$