
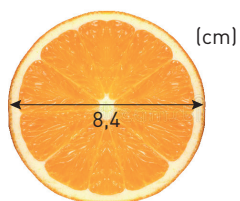




## Cirkelns omkrets och area (II)


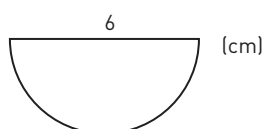
- 1 Beräkna apelsinskivans  
 a) omkrets. Avrunda till hela centimeter.  
 b) area. Avrunda till hela kvadratcentimeter.




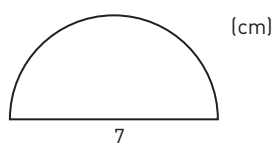
- 2 Beräkna tallrikens area. Avrunda till hela kvadratdecimeter.



- 3 Hur stor area har halvcirkeln? Avrunda till hela kvadratcentimeter.



- 4 Beräkna halvcirkelns  
 a) omkrets. Avrunda till hela centimeter.  
 b) area. Avrunda till hela kvadratcentimeter.



**Cirkelns omkrets och area (II)****FACIT**

- 1 a) 26 cm  
b) 55 cm<sup>2</sup>
- 2 5 dm<sup>2</sup>
- 3 14 cm<sup>2</sup>
- 4 a) 18 cm  
b) 19 cm<sup>2</sup>