
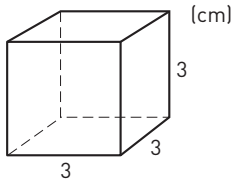

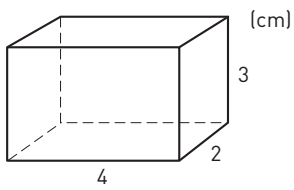


### Volymen av ett rätblock


1 Hur stor volym har kuben?





2 Hur stor volym har rätblocket?



3 Hur stor volym har skokartongen? Svara i hela kubikdecimeter.



4 Beräkna kartongens volym. Svara i tiondels kubikdecimeter.



## Volymen av ett rätblock

**FACIT**

- 1  $27 \text{ cm}^3$
- 2  $24 \text{ cm}^3$
- 3  $10 \text{ dm}^3$
- 4  $3,6 \text{ dm}^3$