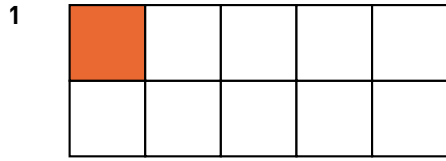
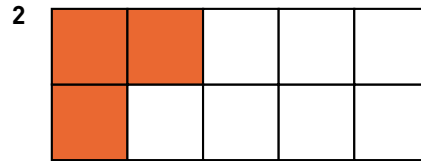


Bråkform och decimalform 1

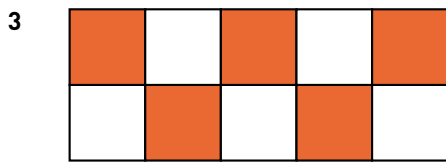
Hur stor andel är färglagd? Svara i både bråkform och decimalform.



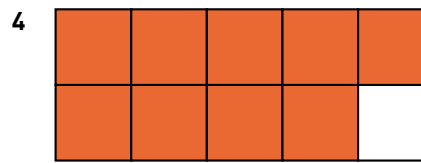
— = —



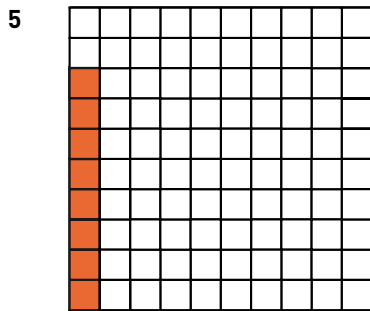
— = —



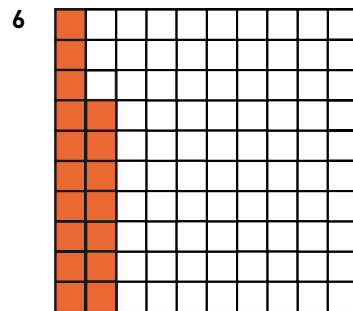
— = —



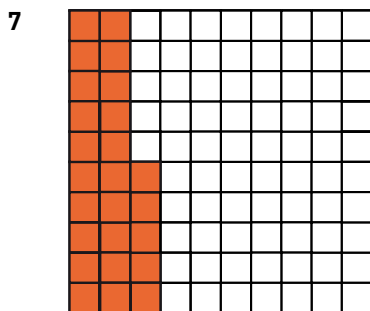
— = —



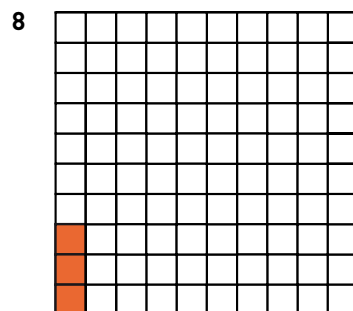
— = —



— = —



— = —



— = —

Bråkform och decimalform 1**FACIT**

1 $\frac{1}{10} = 0,1$

2 $\frac{3}{10} = 0,3$

3 $\frac{5}{10} \left(\frac{1}{2}\right) = 0,5$

4 $\frac{9}{10} = 0,9$

5 $\frac{8}{100} \left(\frac{2}{25}\right) = 0,08$

6 $\frac{17}{100} = 0,17$

7 $\frac{25}{100} \left(\frac{1}{4}\right) = 0,25$

8 $\frac{3}{100} = 0,03$