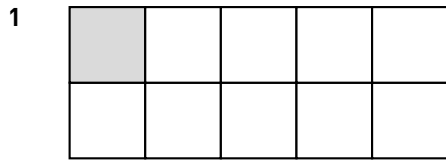



### Bråkform och decimalform 2

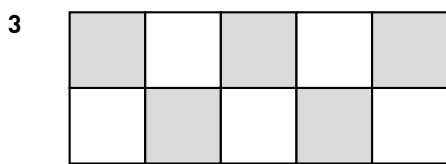
Hur stor andel är skuggad? Svara i både bråkform och decimalform.



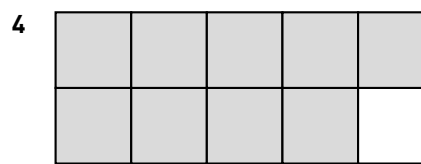
— = —




— = —




— = —




— = —




— = —



— = —



— = —



— = —

**Bråkform och decimalform 2****FACIT**

1  $\frac{1}{10} = 0,1$

2  $\frac{3}{10} = 0,3$

3  $\frac{5}{10} \left(\frac{1}{2}\right) = 0,5$

4  $\frac{9}{10} = 0,9$

5  $\frac{8}{100} \left(\frac{2}{25}\right) = 0,08$

6  $\frac{17}{100} = 0,17$

7  $\frac{25}{100} \left(\frac{1}{4}\right) = 0,25$

8  $\frac{3}{100} = 0,03$