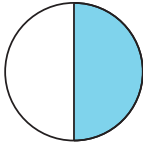


## Bråkform och decimalform 3

Hur stor andel är färglagd? Svara i bråkform och i decimalform.

1 a)




\_\_\_\_\_ = \_\_\_\_\_

b)



\_\_\_\_\_ = \_\_\_\_\_

2 a)



\_\_\_\_\_ = \_\_\_\_\_

b)



\_\_\_\_\_ = \_\_\_\_\_

3 a)



\_\_\_\_\_ = \_\_\_\_\_

b)



\_\_\_\_\_ = \_\_\_\_\_

Hur mycket är

4 a)  $\frac{7}{10} + 0,9 = \underline{\quad} + \underline{\quad} = \underline{\quad}$

b)  $\frac{3}{4} - 0,7 = \underline{\quad} - \underline{\quad} = \underline{\quad}$

5 a)  $1,4 - \frac{1}{4} = \underline{\quad} - \underline{\quad} = \underline{\quad}$

b)  $2,5 + \frac{2}{5} = \underline{\quad} + \underline{\quad} = \underline{\quad}$

6 Vilken pil pekar på talet?

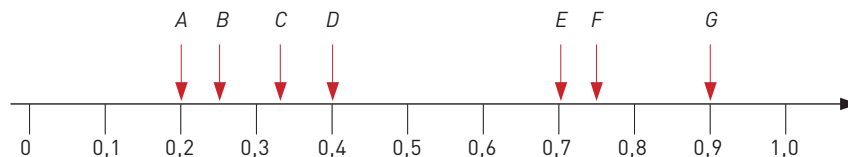
a)  $\frac{1}{4}$  \_\_\_\_\_

b)  $\frac{1}{3}$  \_\_\_\_\_

c)  $\frac{7}{10}$  \_\_\_\_\_

d)  $\frac{2}{5}$  \_\_\_\_\_

e)  $\frac{3}{4}$  \_\_\_\_\_



**Bråkform och decimalform 3****FACIT**

1 a)  $\frac{1}{2} = 0,5$

b)  $\frac{3}{10} = 0,3$

2 a)  $\frac{1}{4} = 0,25$

b)  $\frac{1}{5} = 0,2$

3 a)  $\frac{3}{4} = 0,75$

b)  $\frac{3}{5} = 0,6$

4 a) 1,6

b) 0,05

5 a) 1,15

b) 2,9

6 a) *B*

b) *C*

c) *E*

d) *D*

e) *F*