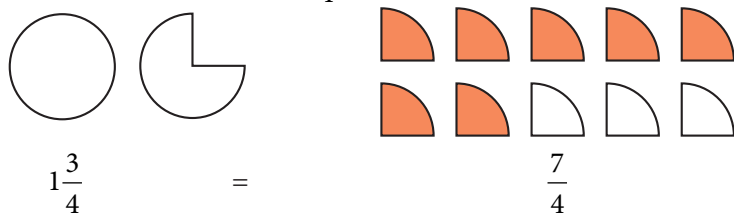
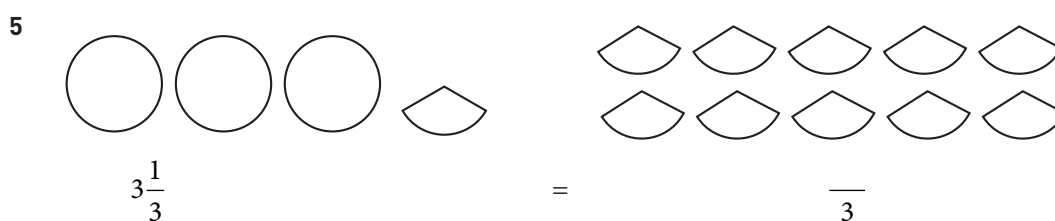
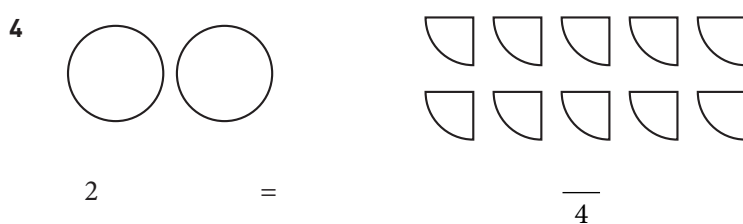
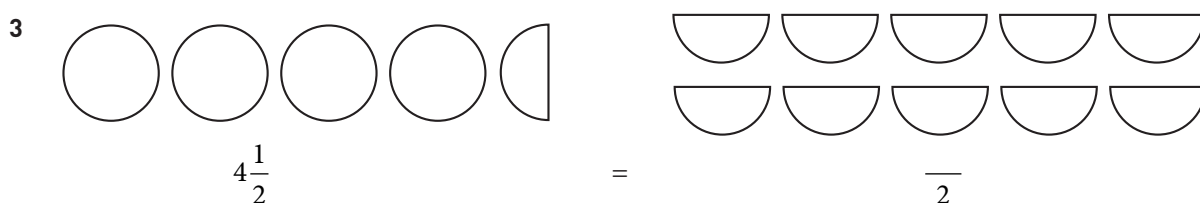
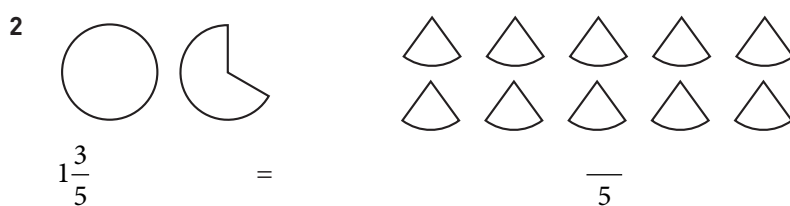
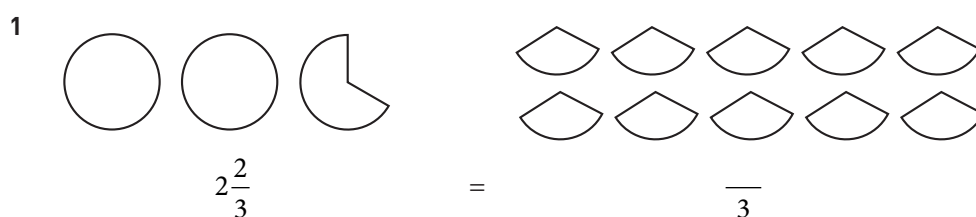


## Blandad form och bråkform

Hur många fjärdedelar är  $1\frac{3}{4}$ ? Färglägg rätt antal delar.



Färglägg rätt antal delar i uppgifterna nedan.



**Blandad form och bråkform****FACIT**

1  $2\frac{2}{3} = \frac{8}{3}$

2  $1\frac{3}{5} = \frac{8}{5}$

3  $4\frac{1}{2} = \frac{9}{2}$

4  $2 = \frac{8}{4}$

5  $3\frac{1}{3} = \frac{10}{3}$