

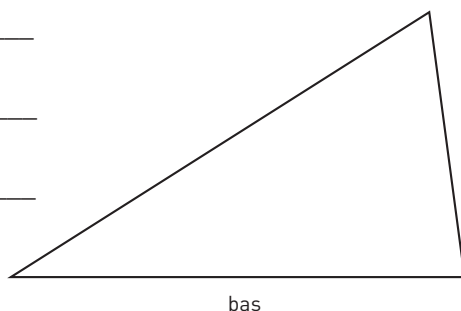
Arean av trianglar 2

Dra höjderna i trianglarna. Mät bas och höjd i hela och halva centimeter. Beräkna arean.

1 Basen = _____

Höjden = _____

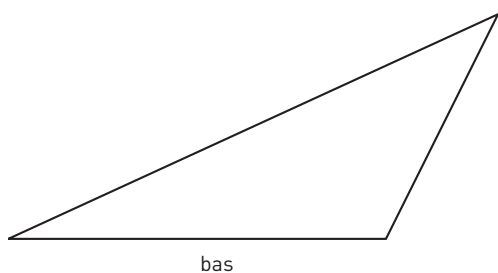
Arean = _____



2 Basen = _____

Höjden = _____

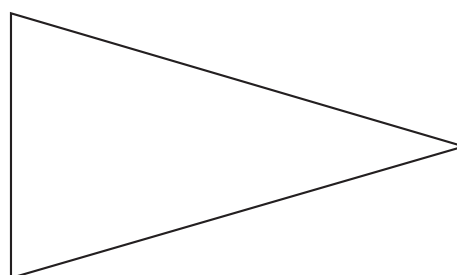
Arean = _____



3 Basen = _____

Höjden = _____

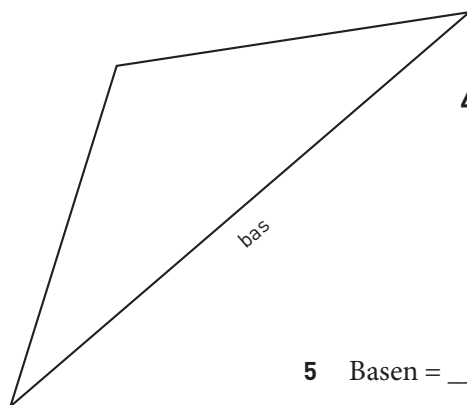
Arean = _____



4 Basen = _____

Höjden = _____

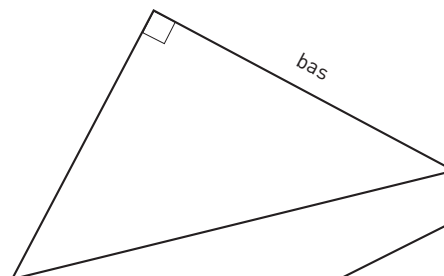
Arean = _____



5 Basen = _____

Höjden = _____

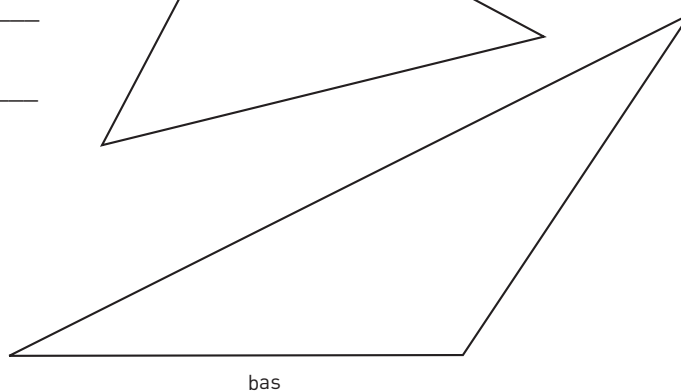
Arean = _____



6 Basen = _____

Höjden = _____

Arean = _____



Arean av trianglar 2

FACIT

1 $10,5 \text{ cm}^2$

2 $7,5 \text{ cm}^2$

3 $10,5 \text{ cm}^2$

4 10 cm^2

5 9 cm^2

6 $13,5 \text{ cm}^2$