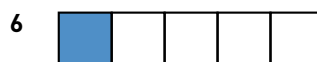


### Hur stor andel ? 1

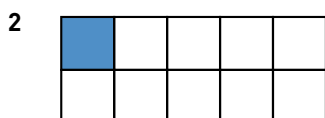
Hur stor andel är färgad? Svara i bråkform och decimalform.



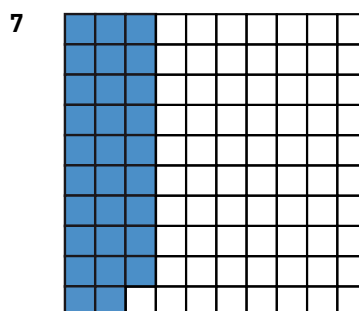
— = —



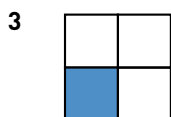
— = —



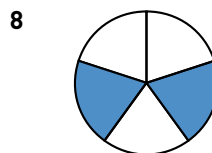
— = —




— = —



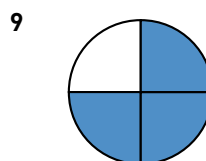
— = —




— = —



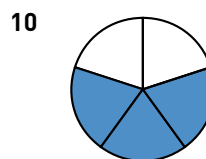
— = —



— = —



— = —



— = —

**Hur stor andel? 1****FACIT**

1  $\frac{1}{2} = 0,5$

2  $\frac{1}{10} = 0,1$

3  $\frac{1}{4} = 0,25$

4  $\frac{3}{10} = 0,3$

5  $\frac{1}{100} = 0,01$

6  $\frac{1}{5} = 0,2$

7  $\frac{29}{100} = 0,29$

8  $\frac{2}{5} = 0,4$

9  $\frac{3}{4} = 0,75$

10  $\frac{3}{5} = 0,6$