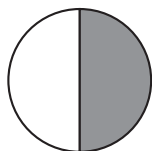


Hur stor andel? 3

Hur stor andel är skuggad? Svara i bråkform, decimalform och procentform.

1



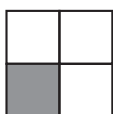
— = — = —

6



— = — = —

2



— = — = —

7



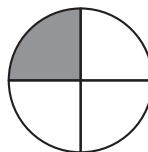
— = — = —

3



— = — = —

8



— = — = —

4



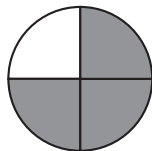
— = — = —

9




— = — = —

5



— = — = —

10



— = — = —

Hur stor andel? 3

FACIT

1 $\frac{1}{2} = 0,5 = 50 \%$

2 $\frac{1}{4} = 0,25 = 25 \%$

3 $\frac{1}{5} = 0,2 = 20 \%$

4 $\frac{1}{4} = 0,25 = 25 \%$

5 $\frac{3}{4} = 0,75 = 75 \%$

6 $\frac{1}{2} = 0,5 = 50 \%$

7 $\frac{2}{5} = 0,4 = 40 \%$

8 $\frac{1}{4} = 0,25 = 25 \%$

9 $\frac{4}{5} = 0,8 = 80 \%$

10 $1 = 1 = 100 \%$