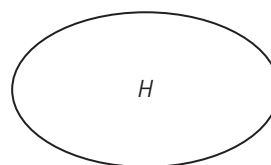
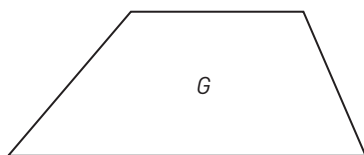
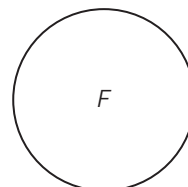
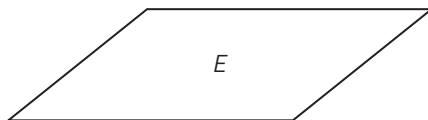
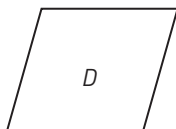
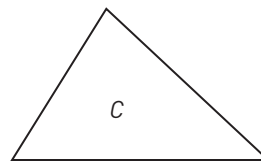
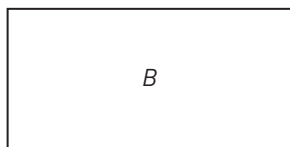
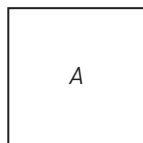


Geometriska figurer

Här ovanför finns ett antal geometriska figurer. Några av dem har flera namn.

Vilken eller vilka av figurerna är en

- 1 triangel _____
- 2 kvadrat _____
- 3 cirkel _____
- 4 rektangel _____
- 5 romb _____
- 6 parallelogram _____
- 7 månghörning _____

Geometriska figurer

FACIT

1 C

2 A

3 F

4 A, B

5 A, D

6 A, B, D, E

7 A, B, C, D, E, G