
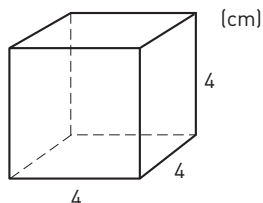

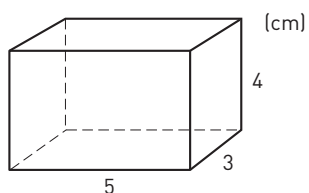


Beräkna begränsningsarean


1 Hur stor begränsningsarea har kuben?




2 Hur stor begränsningsarea har rätblocket?



3 Hur stor begränsningsarea har flyttkartongen? Svara i hela kvadratdecimeter.



4 Hur stor begränsningsarea har asken? Svara i tiotals kvadratcentimeter.



Beräkna begränsningsarean**FACIT**

- 1 96 cm²
- 2 94 cm²
- 3 79 dm²
- 4 110 cm²