
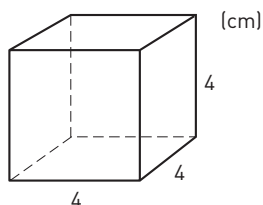

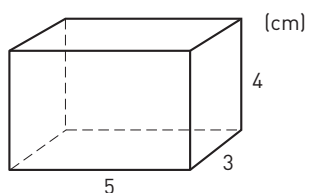


Beräkna begränsningsarean


- 1 Hur stor begränsningsarea har kuben?




- 2 Hur stor begränsningsarea har rätblocket?



- 3 Hur stor begränsningsarea har flyttkartongen? Svara i hela kvadratdecimeter.



- 4 Hur stor begränsningsarea har asken? Svara i tiotals kvadratcentimeter.



Beräkna begränsningsarean**FACIT**

- 1 96 cm²
- 2 94 cm²
- 3 77 dm²
- 4 110 cm²