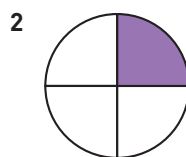


Bråk-, decimal- och procentform

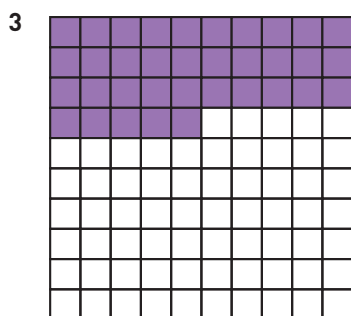
Hur stor andel är lila? Svara i bråkform (enklaste form), decimalform och procentform.



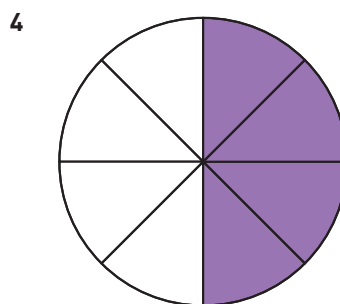
___ = ___ = ___



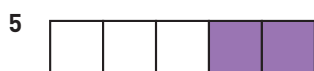
___ = ___ = ___



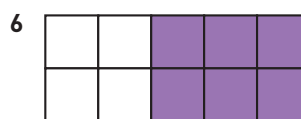
___ = ___ = ___



___ = ___ = ___



___ = ___ = ___



___ = ___ = ___

Fyll i det som saknas. Skriv bråken i enklaste form.

	Bråkform	=	Decimalform	=	Procentform
7	$\frac{1}{5}$	=	_____	=	_____
8	_____	=	0,3	=	_____
9	_____	=	_____	=	80 %
10	$\frac{11}{50}$	=	_____	=	_____
11	_____	=	0,75	=	_____
12	_____	=	_____	=	5 %

Bråk-, decimal- och procentform**FACIT**

1 $\frac{7}{10} = 0,7 = 70 \%$

2 $\frac{1}{4} = 0,25 = 25 \%$

3 $\frac{7}{20} = 0,35 = 35 \%$

4 $\frac{1}{2} = 0,5 = 50 \%$

5 $\frac{2}{5} = 0,4 = 40 \%$

6 $\frac{3}{5} = 0,6 = 60 \%$

7 $\frac{1}{5} = 0,2 = 20 \%$

8 $\frac{3}{10} = 0,3 = 30 \%$

9 $\frac{4}{5} = 0,8 = 80 \%$

10 $\frac{11}{50} = 0,22 = 22 \%$

11 $\frac{3}{4} = 0,75 = 75 \%$

12 $\frac{1}{20} = 0,05 = 5 \%$