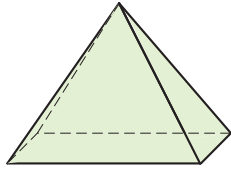
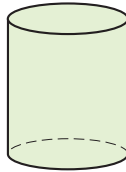


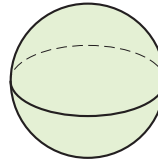
Geometriska objekt (II)



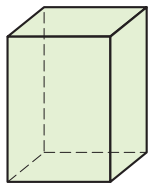
A



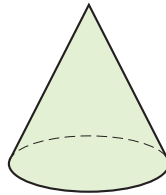
B



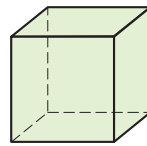
C



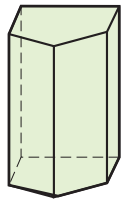
D




E



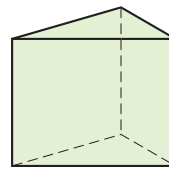
F



G



H



I

Här ovanför finns ett antal geometriska objekt. Några av dem har flera namn.

Vilken eller vilka av objekten ovan är

1 en kon _____

2 ett rätblock _____

3 en kub _____

4 en cylinder _____

5 en pyramid _____

6 ett klot _____

7 ett prisma _____

Geometriska objekt (II)

FACIT

- 1 E
- 2 D och F
- 3 F
- 4 B och H
- 5 A
- 6 C
- 7 D, E, G och I