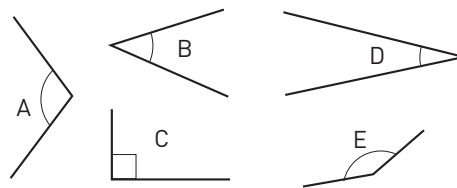


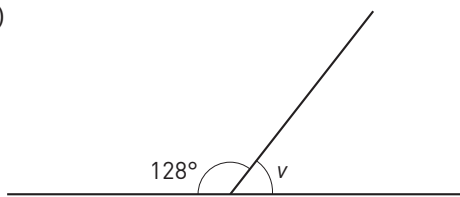
Vinklar

- 1 a) Vilka vinklar är spetsiga? _____
 b) Vilken vinkel är störst? _____
 c) Vilken vinkel är minst? _____



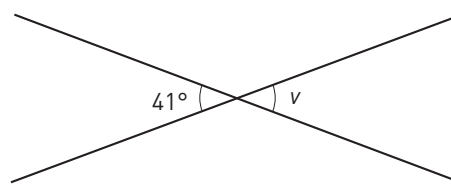
Hur stor är vinkeln v ?

- 2 a)



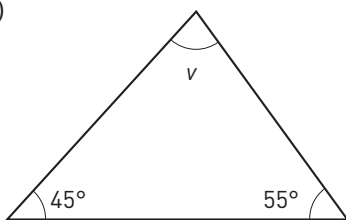
$v =$ _____

- b)



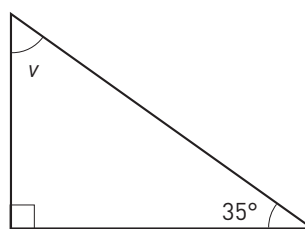
$v =$ _____

- 3 a)



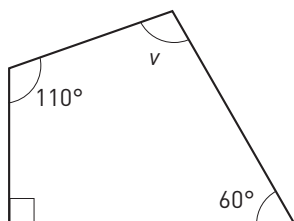
$v =$ _____

- b)



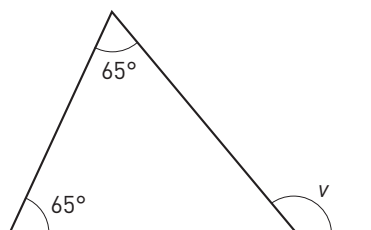
$v =$ _____

- 4 a)




$v =$ _____

- b)




$v =$ _____

- 5 a)



$v =$ _____

- b)



$v =$ _____

Vinklar

FACIT

- 1 a) B, D
b) E
c) D
- 2 a) 52°
b) 41°
- 3 a) 80°
b) 55°
- 4 a) 100°
b) 130°
- 5 a) 120°
b) 45°